
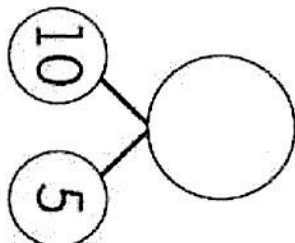



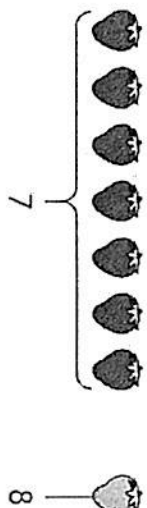



DAY 1	DAY 2	DAY 3	DAY 4																
<p>Show 18.</p>  <p>1 ten _____ ones</p>	 <p>_____ = _____ + _____</p>	 <p>7 - 3 = _____</p> <p>_____</p> <p>_____</p>	<p>Emma has 6 shirts. She buys more shirts. Now she has 8 shirts. How many shirts does she buy?</p> <p>8 = 6 + _____</p> <p>Emma buys _____ shirts.</p>																
<table border="1"> <tr> <td>____ + 3</td> <td>3 + ____</td> <td>3 + ____</td> <td>____ + 6</td> </tr> <tr> <td>6</td> <td>7</td> <td>8</td> <td>9</td> </tr> </table>	____ + 3	3 + ____	3 + ____	____ + 6	6	7	8	9	<table border="1"> <tr> <td>4 + ____</td> <td>____ + 4</td> <td>____ + 5</td> <td>4 + 6</td> </tr> <tr> <td>7</td> <td>____</td> <td>9</td> <td>____</td> </tr> </table>	4 + ____	____ + 4	____ + 5	4 + 6	7	____	9	____	<p>10 - 4 = _____</p>  <p>_____</p> <p>_____</p>	<p><input type="checkbox"/> Pass 2 i-Ready Math Lessons.</p> 
____ + 3	3 + ____	3 + ____	____ + 6																
6	7	8	9																
4 + ____	____ + 4	____ + 5	4 + 6																
7	____	9	____																

DAY 5	DAY 6	DAY 7	DAY 8
<p>DRAW: Is $3 + 6 = 6 + 3$ a true number sentence? Draw to show why or why not.</p>	<p>Find partners that are equal.</p> <div style="display: flex; justify-content: space-around;"> <div style="text-align: center;"> $\begin{array}{c} \boxed{8} \\ / \quad \backslash \\ \boxed{2} \quad \boxed{?} \end{array}$ </div> <div style="text-align: center;"> $\begin{array}{c} \boxed{8} \\ / \quad \backslash \\ \boxed{4} \quad \boxed{?} \end{array}$ </div> </div> <p>$8 = 2 + \underline{\quad}$ $4 + \underline{\quad} = 8$</p> <p>$\underline{\quad} + \underline{\quad} = \underline{\quad} + \underline{\quad}$</p>	<p>$1 + 8 = \underline{\quad}$</p> <p>$5 = 4 + \underline{\quad}$</p> <p>$\underline{\quad} + 4 = 9$</p> <p>$6 + 2 = \underline{\quad}$</p>	<p>Write a subtraction sentence. Then write an addition sentence.</p> <div style="text-align: center;"> $\begin{array}{c} \boxed{9} \\ / \quad \backslash \\ \boxed{6} \quad \boxed{3} \end{array}$ </div> <p>$\underline{\quad} - \underline{\quad} = \underline{\quad}$</p> <p>$\underline{\quad} + \underline{\quad} = \underline{\quad}$</p>
<p>Ella picks 7 strawberries. She picks more. Now she has 8 strawberries. How many more does Ella pick?</p> <div style="text-align: center;">  </div> <p>$7 + \underline{\quad} = 8$</p> <p>Ella picks $\underline{\quad}$ more.</p>		<p>$8 - 5 = \underline{\quad}$</p> <p>$7 - \underline{\quad} = 2$</p> <p>$\underline{\quad} = 4 - 2$</p> <p>$3 = \underline{\quad} - 1$</p>	<p><input type="checkbox"/> Pass 2 i-Ready Math Lessons.</p> <div style="text-align: center;">  </div> <p>I completed my Winter Break Packet! Parent/Guardian sign: _____</p>

Parent/Guardian Signature: _____

DAY 1

DAY 2

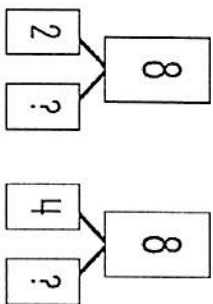
DAY 3

DAY 4

$$2 + 3 = \square + 1$$

$$\square + 1 = 2 + 0$$

$$4 + 1 = 3 + \square$$



$$8 = 2 + \underline{\quad\quad} \quad 4 + \underline{\quad\quad} = 8$$

$$\underline{\quad\quad} + \underline{\quad\quad} = \underline{\quad\quad} + \underline{\quad\quad}$$

Evaluate Circle the true number sentences

$$5 = 4 + 2 \quad 5 + 5 = 9$$

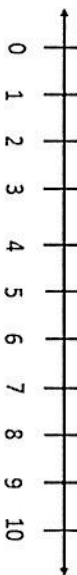
$$6 = 2 + 4 \quad 5 + 2 = 7$$

$$3 + 2 = 4 + 1 \quad 8 + 1 = 4 + 4$$

Pass 2
i-Ready
Math
Lessons.



Peaches



Pam went to her grandma's house to pick peaches. She picked 5 peaches off of one tree and 4 peaches off of the next tree.
How many peaches did she pick in all?

$$2 + \square + 3 = 13$$

$$14 = 2 + \square + 4$$

$$16 = 7 + \square + 6$$

$$\square + 1 + 3 = 11$$

Find 2 numbers that make 10

$$3 + 7 + 5 = \quad 9 + 2 + 1 =$$

$$4 + 6 + 5 = \quad 5 + 3 + 5 =$$

Pass 2
i-Ready
Math
Lessons.



$$\begin{array}{r} 63 \\ + 22 \\ \hline \end{array} \quad \begin{array}{r} 63 \\ + 21 \\ \hline \end{array}$$

$$\begin{array}{r} 31 \\ + 34 \\ \hline \end{array} \quad \begin{array}{r} 65 \\ + 13 \\ \hline \end{array}$$

$$\begin{array}{r} 55 \\ + 11 \\ \hline \end{array} \quad \begin{array}{r} 78 \\ + 11 \\ \hline \end{array}$$

DAY 5

DAY 6

DAY 7

DAY 8

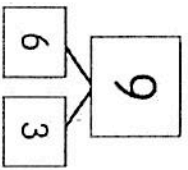
13 - 3 =
13 - 9
15 - 8
12 - 6
11 - 6
12 - 5

$$\begin{array}{r} 7 + \square = 12 \\ 4 + \square = 12 \\ 6 + \square = 11 \\ 3 + \square = 10 \\ 3 + \square = 9 \end{array}$$

Pass 2
i-Ready Math
Lessons.

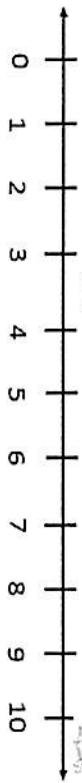


Write a subtraction sentence.
Then write an addition sentence.




____ - ____ = ____
____ + ____ = ____

Chicks



Pat was walking down the road and saw some chicks with their mom. At first, she saw 4 chicks. Then, she saw 3 more chicks. How many chicks did she see altogether?


8 - 5 = ____
7 - ____ = 2
____ = 4 - 2
3 = ____ - 1



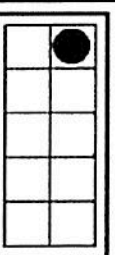
3 + ____ = 10




6 + ____ = 10




8 + ____ = 10



1 + ____ = 10



5 + ____ = 10



10 + ____ = 10